

TeeJay Publishers

book
All

Position and Movement

The School

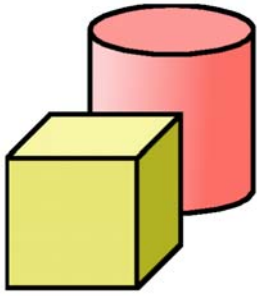


This book belongs to

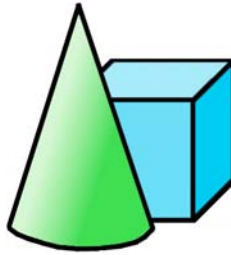
picture or drawing

In Front and Behind

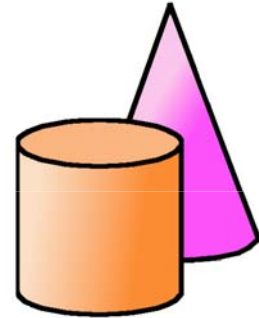
Which shape is **in front** ?



cube or cylinder

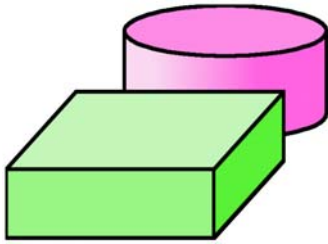


cube or cone

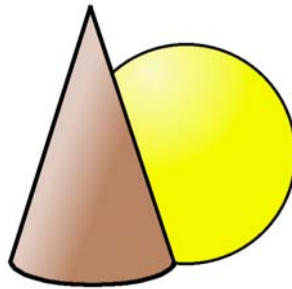


cone or cylinder

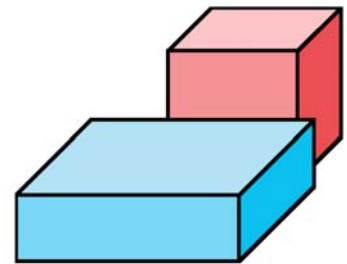
Which shape is **behind** ?



cuboid or cylinder



sphere or cone



cube or cuboid

Which coin is at the **front** ?

Which coin is at the **back** ?

Which coin is in the **middle** ?

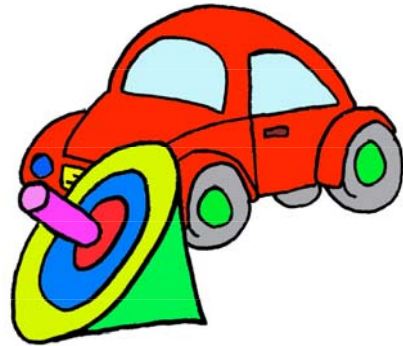


In Front and Behind

Which toy is **in front** ?



plane or train



top or car



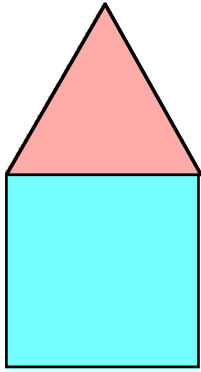
Which boy is **in front** ?

Which boy is at the **back** ?

Which boy is in the **middle** ?

Top and Bottom

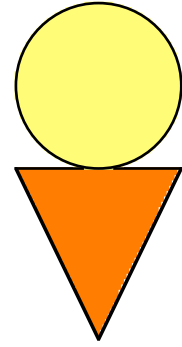
Which shape is on the **top** ?



square or triangle



rectangle or circle



triangle or circle

Which coin is on the **bottom** ?



2p or 20p

 p

10p or 1p

 p

5p or 2p

 p

Which pencil is on the **bottom** ?



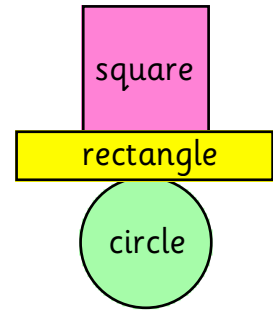
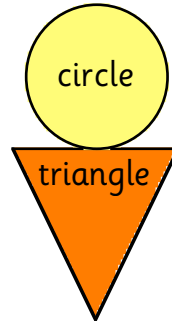
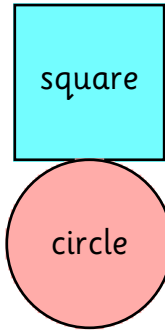
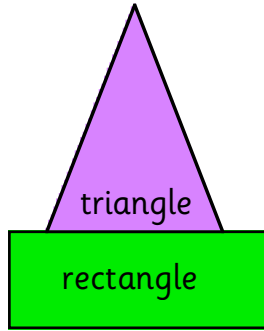
red

yellow

green

Which pencil is on the **top** ?

Above and Below



Which shape is **above** the  ?

sq _____

Which shape is **below** the  ?

Which shape is **above** the  ?

Which shape is **below** the  ?

Which shape is **above** the  ?


Which **toy** lies **just**

above the ball ?

below the mouse ?

above the doll ?


below the car ?




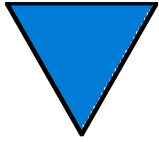
Right and Left

Left
Hand


Right
Hand





Which shape is on the **left** ?



square or triangle



rectangle or circle



triangle or circle

Which object is on the **right** ?



apple or pear

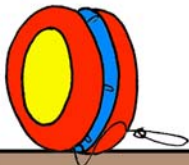


star or moon




cat or dog

yo-yo



bat and ball



truck



top



Which toy is **just**

to the **right** of the truck ?


to the **left** of the bat and ball ?

to the **left** of the top ?

Right and Left

Left
Hand

Right
Hand



Which coin is on the **left** ?

Which coin is on the **right** ?

Which coin is in the **middle** ?

Which coin is just **left** of the 2p ?

Which coin is just **right** of the 2p ?



What **colour** is the house...

on the **right** ?


on the **left** ?

in the **middle** ?

to the **right** of the **middle** house ?

Position

Look at the picture of a classroom.



Who is sitting to the **right** of Ann ?

Who is sitting to the **left** of Lee ?

Who is sitting **behind** Ian ?

Who is sitting in **front** of Ted ?

Who is sitting to the **right** of Lou ?

Who is sitting to the **left** of Bill ?


Who is sitting in **front** of Nan ?

Who is sitting at the **back right** ?

Who is **not in class** today ?

Position

James is sitting to the **right** of **Lucy**.
Write **James** in the picture.



Put the children's names in the picture.

Anne is sitting **behind** **Fred**.

Neil is sitting in **front** of **Lucy**.

Mary is sitting to the **left** of **Fred**.

Lee is sitting to the **right** of **James**.

Jade is sitting in **front** of **Nick**.

Helen is sitting in **front** on the **right**.

Movement

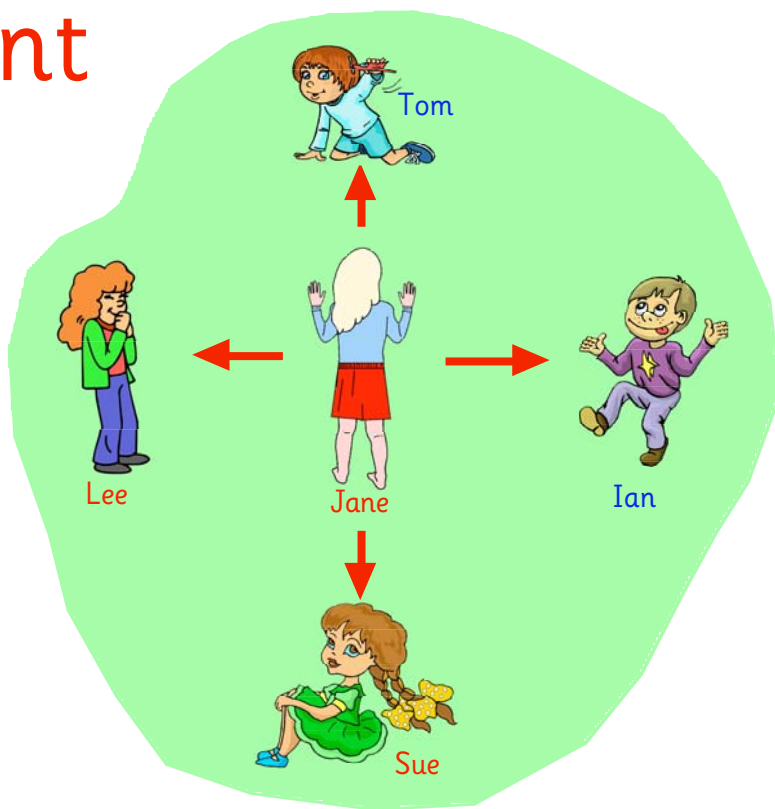
Look at **Jane**.

Who is on **Jane's right** side ?

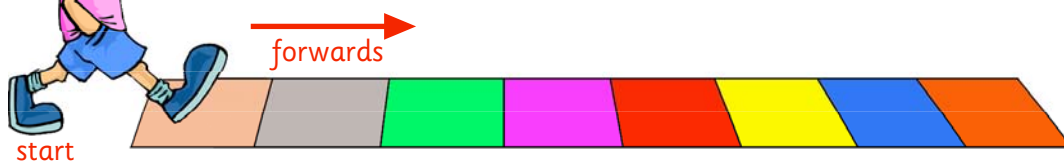
Who is on **Jane's left** side ?

Who is in **front** of **Jane** ?

Who is **behind** **Jane** ?



Look at **Jaz**. He is walking **left to right**.
He lands on a new slab every step he takes.



What **colour** of slab will Jaz land on after taking
3 steps **forward** ?

then **4** more steps **forward** ?

then **2** steps **back** ?

then **1** step **forward** ?

Movement

Jill is climbing the ladder.

What colour of step will she stop on if she climbs from the ground ...

...up 4 steps ?

...up 6 steps ?

...up 9 steps ?

...up 12 steps ?

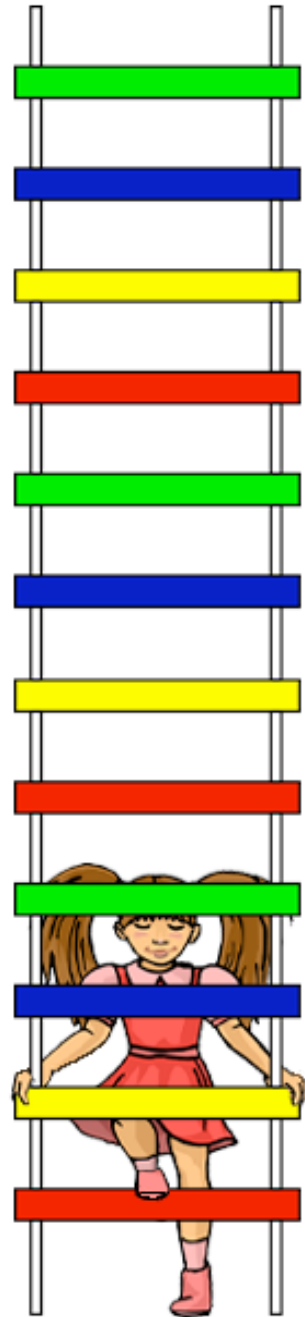
What colour of step will she stop on if she climbs from the ground ...

...up 7 steps, then down 4 steps ?

...up 9 steps, then down 3 steps ?

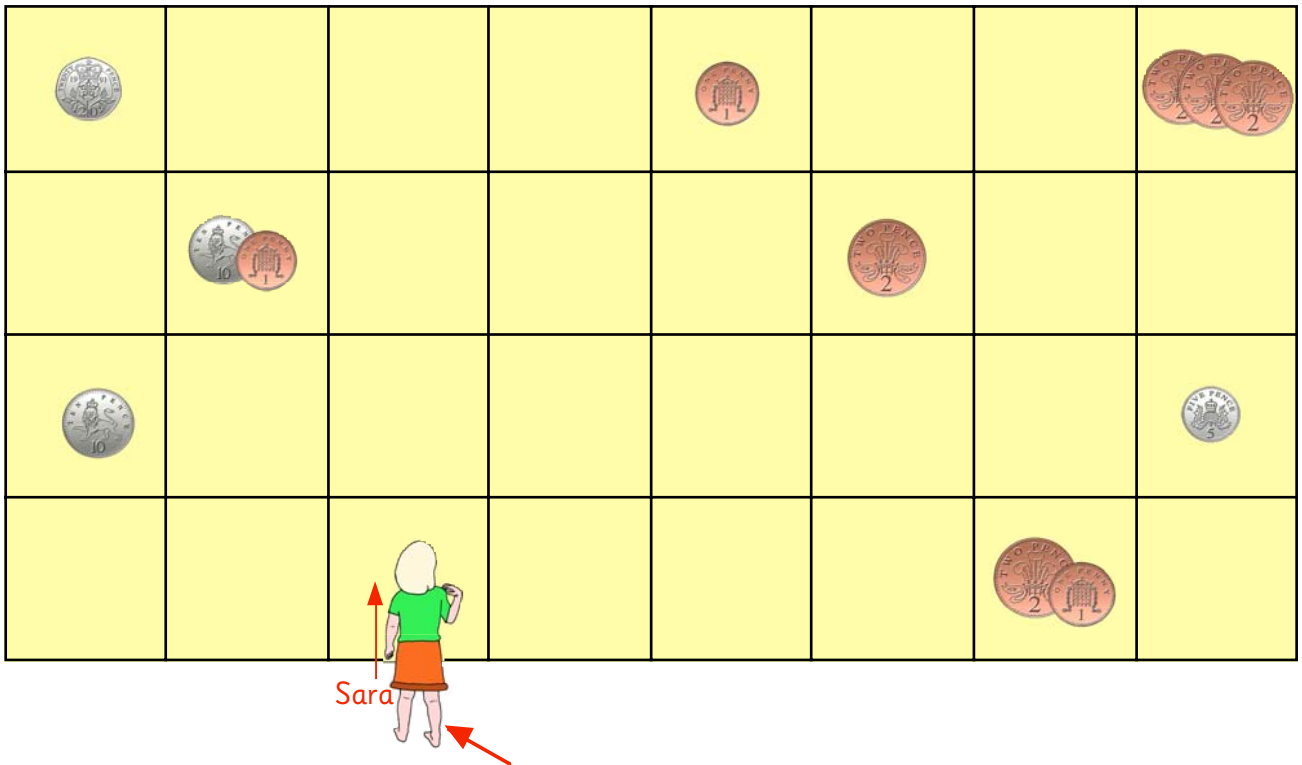
...up 10 steps, then down 9 steps ?

...up 12 steps, then down 5 steps ?



Movement

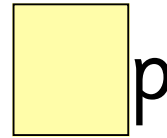
There are **coins** on some of the square slabs.



Sara starts off from **here** each time.

How much money is on the square where she stops ?

Forward 3 - turn right - forward 3.



p

Forward 2 - turn left - forward 2.




p

Forward 4 - turn right - forward 2.




p

Forward 3 - turn left - forward 1.



p

Forward 4 - turn right - forward 5.

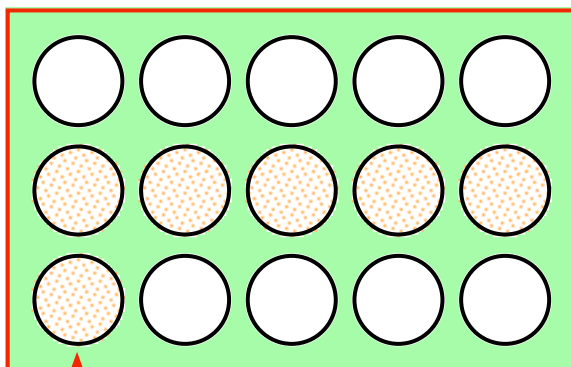


p

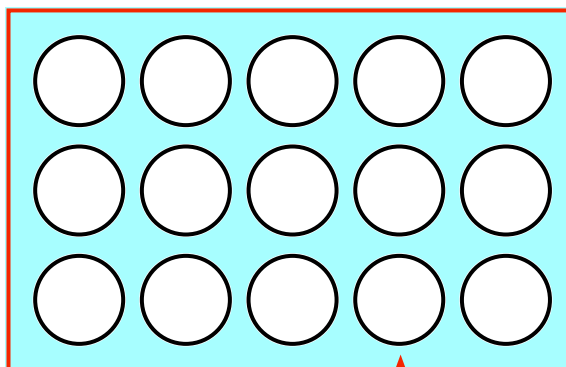
Movement

Colour all the circles to show each journey.

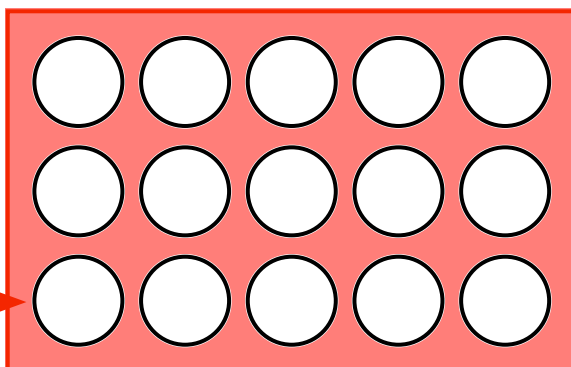
forward 2 - turn right - forward 4



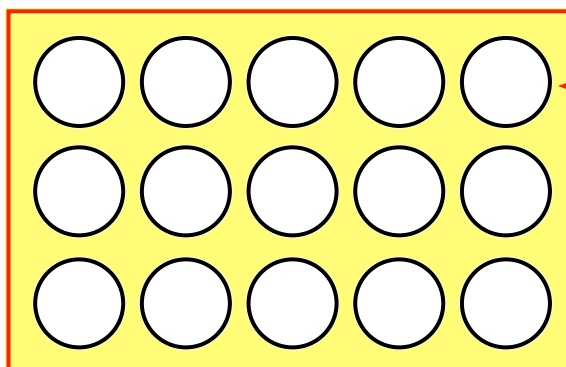
forward 3 - turn left - forward 2



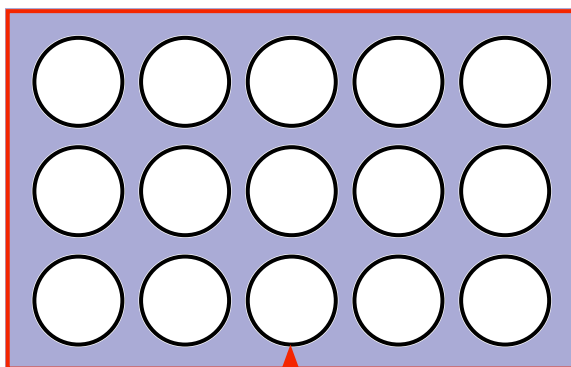
forward 4 - turn left - forward 2



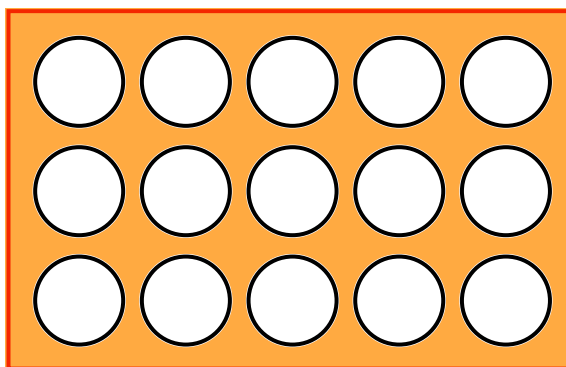
forward 3 - turn left - forward 1



forward 2 - turn left -
- forward 2 - turn right -
- forward 1

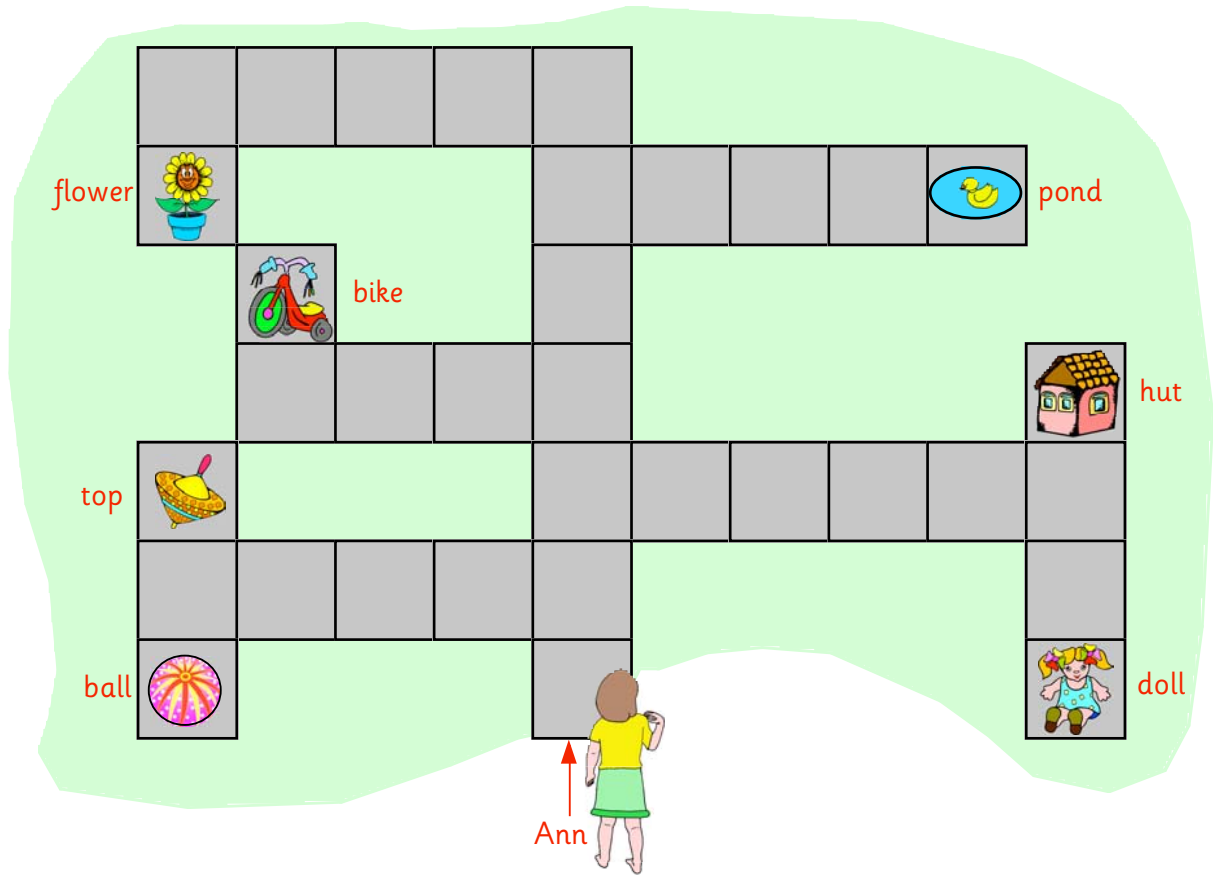


forward 5 - turn right -
- forward 2 - turn right -
- forward 4



Movement

Ann walks across the coloured slabs in her garden.



What is on the slab after Anne walks

forward **6** turn right forward **4** ?

p.....

forward **3** turn right forward **5** turn left forward **1** ?

forward **2** turn left forward **4**, turn right, forward **1** ?




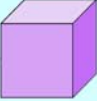
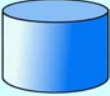






forward **4** turn left forward **3** turn right forward **1** ?

forward **3** turn right forward **5** turn right forward **2** ?

forward **7**, turn left, forward **4**, turn left, forward **1** ?

Movement

Dave controls his toy car with his remote control.

							
							
							
							
							← forward
							

What **shape** is on the square when Dave moves the car....

forward **2** - turn **right** - forward **3** ?

forward **5** - turn **left** - forward **1** ?

forward **7** - turn **right** - forward **2** ?

forward **3** - turn **right** - **backwards 2** ?

forward **6** - turn **left** - **backwards 3** ?

forward **8** - turn **right** - **backwards 1** ?

forward **5** - turn **right** - forward **2** -
turn **left** - **backwards 2** ?

I can do this

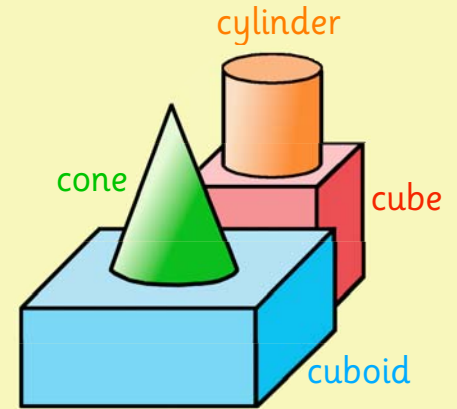
What shape is....

in **front** of the **red cube** ?

behind the **green cone** ?

below the **orange cylinder** ?

above the **blue cuboid** ?




Look at the children.

Who is sitting ...

in **front** of **Jane** ?

to the **right** of **Ben** ?

to the **left** of **Nick** ?



There are numbers on the blue slabs.

What number will Ann stand on if she walks

forward **6** turn right forward **4** ?

forward **7** turn left forward **4** ?

forward **3** turn right forward **5** ?

